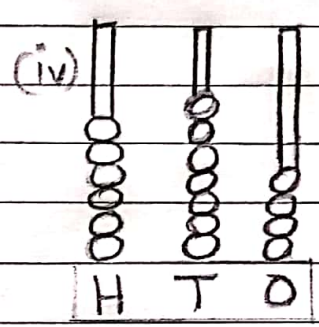
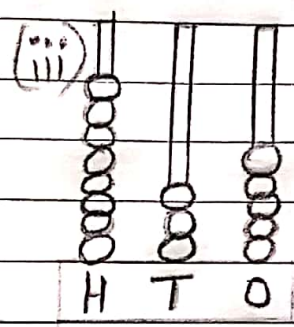
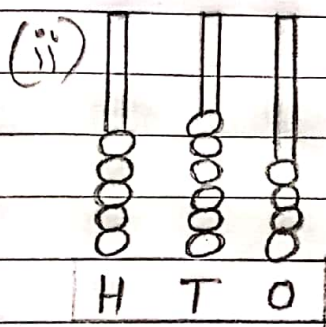
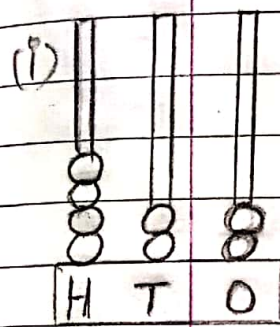


DHAGIRATHI DAL SHIKSHA JADAN SECONDARY SCHOOL

CLASS - IInd

SUBJECT - MATH

1. Read the numbers denoted by the abacus. Write the numbers.



⇒ 422

⇒

⇒

⇒

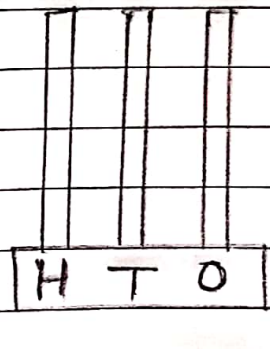

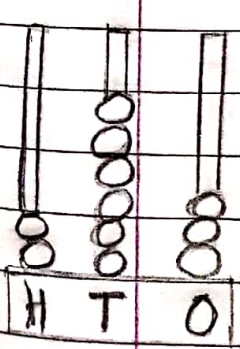
2. Represent the given numbers on the abacus.

(i) 263

(ii) 718

(iii) 491

(iv) 560



3. Compare numbers with $>$, $<$, $=$.

(i) 128 $<$ 487

(ii) 166 \square 592

(iii) 298 \square 298

(iv) 336 \square 189

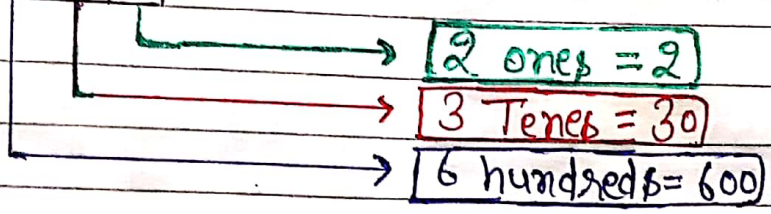
(v) 581 \square 581

(vi) 179 \square 200

★ Place value :-

Example :-

H	T	O
6	3	2



4. Write place values of underlined digits :-

(i) 7 2 8 2 Tens = 20

(ii) 4 2 6 _____

(iii) 9 3 1 _____

(iv) 3 1 0 _____

(v) 6 0 5 _____

5. learn and write table of 8 and 9 in copy.

